

# MOUNT CARMEL PUBLIC SCHOOL

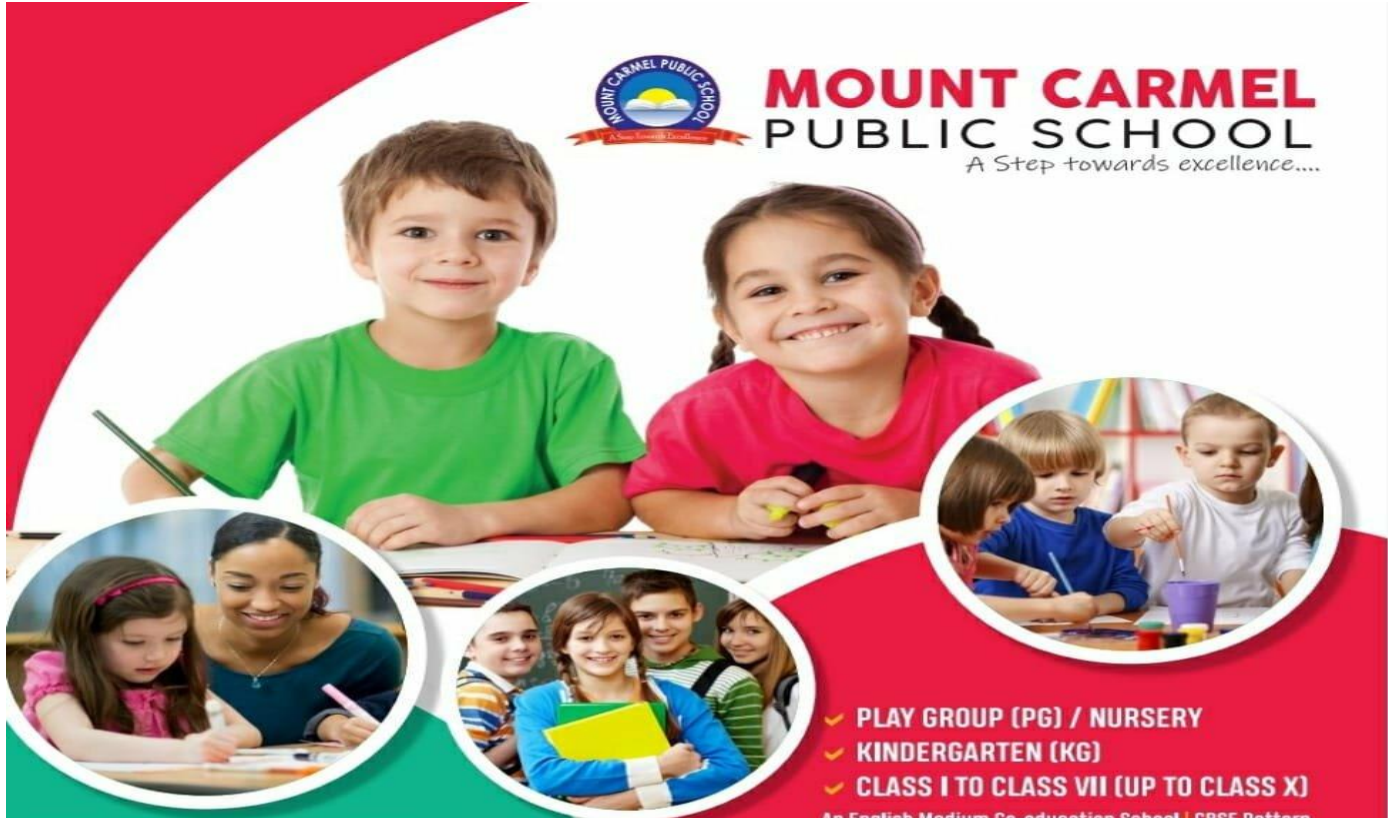
Session-2020-2021

Class V Worksheets Date – 23.06.2020



**MOUNT CARMEL  
PUBLIC SCHOOL**

*A Step towards excellence....*



- ✓ PLAY GROUP (PG) / NURSERY
- ✓ KINDERGARTEN (KG)
- ✓ CLASS I TO CLASS VII (UP TO CLASS X)

An English Medium Co-education School | CBSE Pattern

## FACILITIES

- STATE OF THE ART CAMPUS (WITHIN 3 YEARS)
- CBSE STUDY PATTERN
- PRINCIPAL/ TEACHERS FROM OTHER STATES
- ADVANCE COMPUTER LAB FOR STUDENTS
- CENTRALIZED AIR CONDITION CLASSROOMS
- SMART CLASSES
- CLASSROOM MONITORING THROUGH CCTV
- PICK & DROP FACILITY
- RO WATER FOR STUDENTS
- SCHOLARSHIP FOR MERITORIOUS STUDENTS
- NTSE/ OLYMPIAD PARTICIPATION
- YOGA & MEDITATION
- PHYSICAL TRAINER FOR STUDENTS
- DANCE, ART & CRAFT, MUSIC



## ADMISSION STARTS (LIMITED SEATS)

- | PLAY GROUP/ NURSERY & KINDERGARTEN  
↑ ONLY 25 SEATS PER CLASS
- | CLASS I TO CLASS VII (UP TO CLASS X)  
↑ ONLY 30 SEATS PER CLASS

Jagriti Vihar, Bypass Mission School Road,  
Aurangabad (Bihar) - 824101

Ph : 7859097066/7762047700

E-mail : info@mcps.in | admission@mcps.in  
www.mcps.in

Please refer to your textbook for content.

English - Language for Life  
Chapter 1 - The Invention of Shoes

Page # 5

- B.
2. "...they made a purchase of seventeen lakh fifty thousand brooms..."  
"...twenty-one lakh water-carriers set out with bags of water..."  
Why do you think the author gives us these numbers? What picture does it create in your mind?
  3. "The royal feet were saved. So was Gobu. And so was the earth."  
How was the earth saved?

Please refer to your textbook for content.

Computer

Chapter 2- Windows 7

Page # 28

D.

2. What is Windows Explorer?

.....

.....

.....

3. How can we move files and folders from one location to another?

.....

.....

.....

Please refer to your textbook for content.

## Hindi

### Chapter - 2 आपसी प्रेम

Page # 13

6. सही उत्तर के सामने (✓) का चिह्न लगाइए—

(क) 'अध्यापिका' शब्द का पुल्लिंग है—

(i) शिक्षिका

(ii) अध्यापक

(iii) छात्रा

(iv) महिला

(ख) 'घण्टी' शब्द का बहुवचन है—

(i) घण्टे

(ii) घण्टियाँ

(iii) घण्टा

(iv) घण्टों

जो शब्द क्रिया की भी विशेषता बताएँ, वे शब्द क्रियाविशेषण कहलाते हैं।

नीचे दिए वाक्यों में से क्रियाविशेषण शब्द चुनकर लिखिए—

(क) आप एक-एक करके अपना परिचय दें।

.....

(ख) हम सब मिल-बाँटकर खाते हैं।

.....

(ग) हम सब मिल-जुलकर रहते हैं।

.....

(घ) कक्षा अध्यापिका धीरे-धीरे चल रही थीं।

.....





Please refer to your textbook for content.

General Knowledge


Chapter 9 - Amazing Birds

Page # 16

 **QUICK THINKING**

A. Answer the following questions:

1. Which is the heaviest bird in the air?
2. What kind of bones do birds have?
3. Which bird eats with its head upside down?
4. Which is the world's fastest bird?
5. Which bird has the largest wingspan?



**HELP  
CORNER**


Albatross, Hollow, Flamingo, Kori Bustard, Peregrine Falcon

Please refer to your textbook for content.

## Hindi Sulekhika

Page # 4

दिनांक: / /



सज्जनों के सत्संग से बुद्धि तेज होती है।  
सज्जनों के सत्संग से बुद्धि तेज होती है।

Teacher's Remark: Tick (✓) One Box.

★  ★ ★  ★ ★ ★

Kindly refer to your textbook for content

## Mathematics

### 1. Numbers



1. Write a number for each of the following.

(a) Three crore fifty-three thousand six hundred seven

\_\_\_\_\_

(b) Fifteen crore nine thousand two hundred forty-two

\_\_\_\_\_

(c) Eighty-nine lakh forty-five thousand two hundred seventy-five

\_\_\_\_\_

(d) Nine crore nine thousand nine hundred nine

\_\_\_\_\_

(e) Sixty-seven crore

\_\_\_\_\_

2. Complete the series.

23,45,479; \_\_\_\_\_; 23,45,481; \_\_\_\_\_; \_\_\_\_\_; 23,45,484

3. Write the largest and the smallest number of 6 digits.

4. Write the smallest number of 7 digits having 3 different digits.

5. Write the largest number of 6 digits ending with the digit 5.

6. Write the number name for 22,02,22,222 using the Indian system of numeration.

7. Round off 4,531 to the nearest 10, 100 and 1,000.

8. Which is greater—3,45,673 or 3,47,549?

9. What are the place values of 4 and 6 in 3456779 in the Indian as well as the International system of numeration? Find their sum and difference.

10. 50 million = \_\_\_\_\_ lakh

## Environmental Studies

### 2. Learning with a difference

#### C. Answer the following questions.

1. How did Helen Keller lose her sight?
2. Describe Helen's life when she was a child.
3. Who was Helen's 'Teacher'?